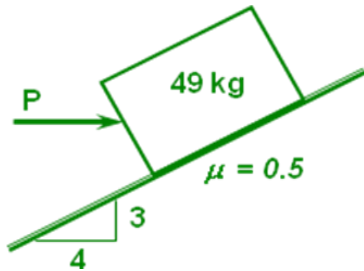


Pag. 1.-

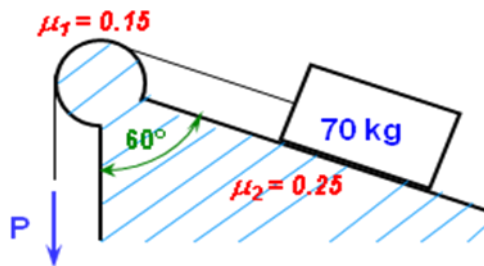
Calcular la fuerza **P**, un instante antes de que el bloque **baje** por el plano inclinado



49 kN		3
0,5 μ	5	4
$\alpha = \tan^{-1}(8/15)$	36,8699	
$\theta = \tan^{-1} \mu$	26,5651	
$\Phi = \theta - \alpha$	10,3048	
$P = w (\tan \Phi)$	8,9091	kgf

Pag. 2.-

El **bloque** de la figura está en condición de movimiento inminente hacia abajo, calcular la magnitud de **P**.



m **70** kg 686,0000 N (w)

μ_2 **0,25**

ϕ **60** °

$$T = w \cdot (\cos(\phi \cdot \pi / 180) - \mu_2 \cdot \sin(\phi \cdot \pi / 180))$$

T 194,4766433 N

μ_1 **0,15**

$$P_{\text{mim}} = T / \text{EXP}(\mu_1 \cdot (180 - \phi) \cdot (\pi / 180))$$

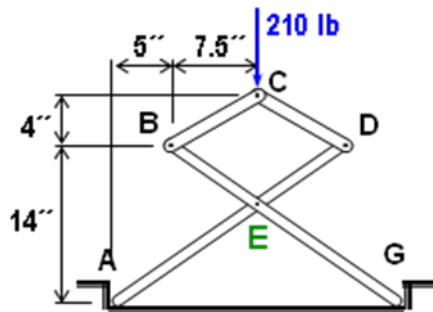
P_{MIN} 142,0463 N

$$P_{\text{max}} = T \cdot \text{EXP}(\mu_1 \cdot (180 - \phi) \cdot (\pi / 180))$$

NO P_{MAX} 266,2595 N

Pag. 3.-

Calcular las componentes del pasador E.



210 lb	4
7,5 pulg	7,5 8,5
5 pulg	14 pulg

$$R_{BC} = 210/2 \text{ lb} / (4/8,5); \Sigma F_y$$

R_{BC}	223,1250 lb (C)
-----------------------	------------------------

$$R_{Gy} = 210/2; \Sigma M_A$$

R_{Gy}	105,0000 lb
-----------------------	--------------------

$$R_{Ey} = R_{BC} * (4/8,5) + R_{Gy}; \Sigma F_y$$

R_{Ey}	0,0000 lb
-----------------------	------------------

EGy	8,7500 pulg
------------	--------------------

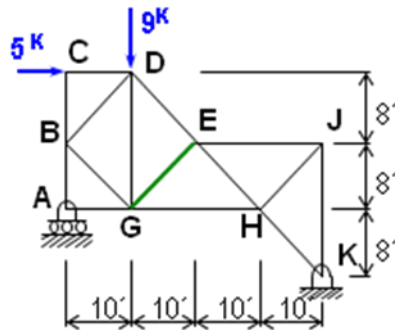
$$R_{Ex} = R_{BC} * ((4/8,5) * 20 + (7,5/8,5) * 14) / EGy;$$

$$\Sigma M_G$$

R_{Ex}	555,0000 lb
-----------------------	--------------------

Pag.4.-

Calcular la carga soportada por la barra EG.



5	K		8
9	K	12,80624847	10

$$R_A = (9k \cdot 3 \cdot 10' + 5k \cdot 3 \cdot 8') / (4 \cdot 10'); \quad \Sigma M_K$$

R_A	3,7500	K
----------------------	---------------	----------

$$R_{DE} = (R_A \cdot 10' + 5k \cdot 2 \cdot 8') / (2 \cdot 8' \cdot 10 / 12,8); \quad \Sigma M_G$$

R_{DE}	9,4046	K (C)
-----------------------	---------------	--------------

$$R_{EG} = (R_A - 9k + R_{DE} \cdot (8 / 12,8)) / (8 / 12,8); \quad \Sigma F_y$$

R_{EG}	1,0005	kN (C)
-----------------------	---------------	---------------